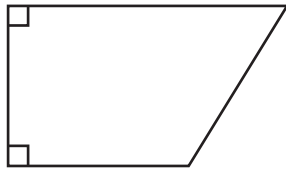


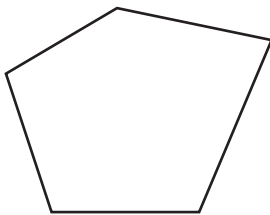
Counting Angles

Sheet 1

ExampleNumber of acute angles: 1 Number of obtuse angles: 1 Number of right angles: 2

For each figure, count the number of angles of each type.

1)

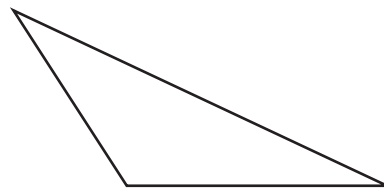


Number of acute angles: _____

Number of obtuse angles: _____

Number of right angles: _____

2)

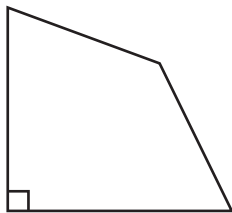


Number of acute angles: _____

Number of obtuse angles: _____

Number of right angles: _____

3)

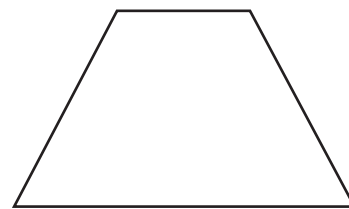


Number of acute angles: _____

Number of obtuse angles: _____

Number of right angles: _____

4)

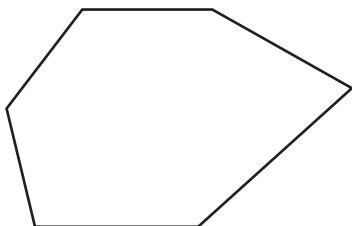


Number of acute angles: _____

Number of obtuse angles: _____

Number of right angles: _____

5)

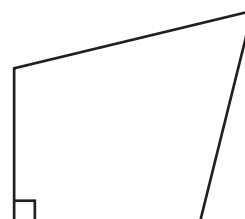


Number of acute angles: _____

Number of obtuse angles: _____

Number of right angles: _____

6)



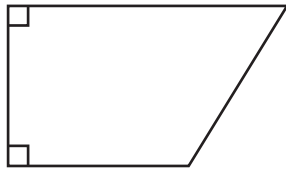
Number of acute angles: _____

Number of obtuse angles: _____

Number of right angles: _____

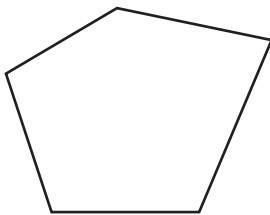
Answer Key**Counting Angles**

Sheet 1

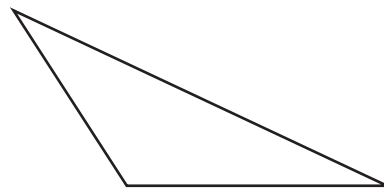
ExampleNumber of acute angles: 1Number of obtuse angles: 1Number of right angles: 2

For each figure, count the number of angles of each type.

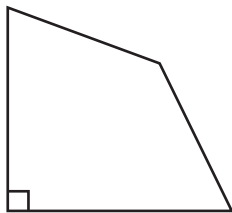
1)

Number of acute angles: 1Number of obtuse angles: 4Number of right angles: Nil

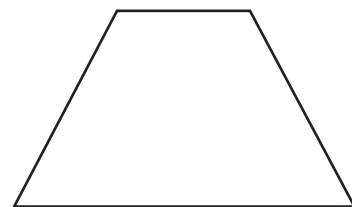
2)

Number of acute angles: 2Number of obtuse angles: 1Number of right angles: Nil

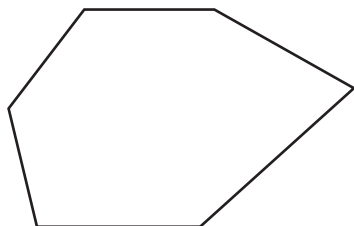
3)

Number of acute angles: 2Number of obtuse angles: 1Number of right angles: 1

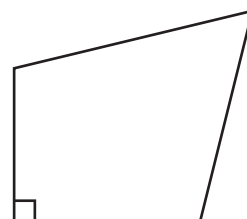
4)

Number of acute angles: 2Number of obtuse angles: 2Number of right angles: Nil

5)

Number of acute angles: 1Number of obtuse angles: 5Number of right angles: Nil

6)

Number of acute angles: 1Number of obtuse angles: 2Number of right angles: 1